

Grade 12
Pre-Calculus Mathematics
Achievement Test

Booklet 1

June 2015

Manitoba Education and Advanced Learning Cataloguing in Publication Data

Grade 12 pre-calculus mathematics achievement test.
Booklet 1. June 2015 [electronic resource]

ISBN: 978-0-7711-5849-0

1. Mathematics—Examinations, questions, etc.
 2. Educational tests and measurements—Manitoba.
 3. Mathematics—Study and teaching (Secondary)—Manitoba.
 4. Precalculus—Study and teaching (Secondary)—Manitoba.
 5. Mathematical ability—Testing.
- I. Manitoba. Manitoba Education and Advanced Learning.
510.76

Manitoba Education and Advanced Learning
School Programs Division
Winnipeg, Manitoba, Canada

Permission is hereby given to reproduce this document for non-profit educational purposes provided the source is cited.

After the administration of this test, print copies of this resource will be available for purchase from the Manitoba Text Book Bureau. Order online at <www.mtbb.mb.ca>.

This resource will also be available on the Manitoba Education and Advanced Learning website at <www.edu.gov.mb.ca/k12/assess/archives/index.html>.

Websites are subject to change without notice.

Disponible en français.

Available in alternate formats upon request.


Grade 12 Pre-Calculus Mathematics Achievement Test

DESCRIPTION

Time: 3 hours

Numbers and Marks by Question Type


	Selected Response	Constructed Response	Marks
Booklet 1*	–	13	31
Booklet 2	9	20	59
Total	9	33	90

* The first 6 questions in *Booklet 1* require a calculator. 
You will have access to your calculator for the first 45 minutes of the test.

GENERAL DIRECTIONS

- Read all instructions carefully.
- The perforated *Formula Sheet* and the *Terminology Sheet* can be removed from the test booklet. No marks will be given for work done on these pages.
- The blank pages at the back of each booklet may be used as scrap paper, but must **not** be removed from the test booklet. No marks will be given for work done on these pages.
- Note that diagrams and graphs provided in the test booklets may not be drawn to scale.
- After 45 minutes, put away your calculator. Even though you may not have finished *Booklet 1*, *Booklet 2* will be distributed at this time. You may choose to continue working on *Booklet 1* or start working on *Booklet 2*, but you will no longer have access to your calculator.

Instructions

- There are 13 questions for a total of 31 marks.
- Calculators (scientific or graphing) are allowed for the first 45 minutes of the test.
- A calculator icon  appears next to the questions that require a calculator.
- Write each solution in the space provided.
- For full marks, your answers must show all pertinent diagrams, calculations, and explanations.
- Graphing calculator solutions must include an explanation of how your final answer is obtained.
- Your solutions should be neat, organized, and clear.
- Some answers are to be given as decimal values. Rounding too early in your solution may result in an inaccurate final answer for which full marks will not be given.
- Express your answers as exact values or correct to the nearest thousandth (3 decimal places) unless instructed otherwise.

Formula Sheet

$$s = \theta r$$

$$\sin^2 \theta + \cos^2 \theta = 1$$

$$\tan^2 \theta + 1 = \sec^2 \theta$$

$$1 + \cot^2 \theta = \csc^2 \theta$$

$$\sin(\alpha - \beta) = \sin \alpha \cos \beta - \cos \alpha \sin \beta$$

$$\cos(\alpha - \beta) = \cos \alpha \cos \beta + \sin \alpha \sin \beta$$

$$\tan(\alpha - \beta) = \frac{\tan \alpha - \tan \beta}{1 + \tan \alpha \tan \beta}$$

$$\sin(\alpha + \beta) = \sin \alpha \cos \beta + \cos \alpha \sin \beta$$

$$\cos(\alpha + \beta) = \cos \alpha \cos \beta - \sin \alpha \sin \beta$$

$$\tan(\alpha + \beta) = \frac{\tan \alpha + \tan \beta}{1 - \tan \alpha \tan \beta}$$

$$\sin 2\alpha = 2 \sin \alpha \cos \alpha$$

$$\cos 2\alpha = \cos^2 \alpha - \sin^2 \alpha$$

$$\cos 2\alpha = 1 - 2 \sin^2 \alpha$$

$$\cos 2\alpha = 2 \cos^2 \alpha - 1$$

$$\tan 2\alpha = \frac{2 \tan \alpha}{1 - \tan^2 \alpha}$$

$$\log_a (MN) = \log_a M + \log_a N$$

$$\log_a \left(\frac{M}{N} \right) = \log_a M - \log_a N$$

$$\log_a (M^n) = n \log_a M$$

$$P(n, r) \text{ or } {}_n P_r = \frac{n!}{(n-r)!}$$

$$C(n, r) \text{ or } {}_n C_r = \frac{n!}{r!(n-r)!}$$

$$t_{k+1} = {}_n C_k a^{n-k} b^k$$

For $ax^2 + bx + c = 0$,

$$x = \frac{-b \pm \sqrt{b^2 - 4ac}}{2a}$$

Terminology Sheet

Some questions may contain directing words such as *explain*, *identify*, and *justify*. These words are defined below.

Evaluate: Find the numerical value.

Explain: Use words to provide the cause of or reason for the response, or to render the response more clear and understandable.

Sketch the graph: Provide a detailed drawing with key features of the graph that includes a minimum of 2 coordinate points.

Identify/Indicate: Recognize and select the answer by stating or circling it.

Justify: Show reasons for or give facts that support a position by using mathematical computations, words, and/or diagrams.

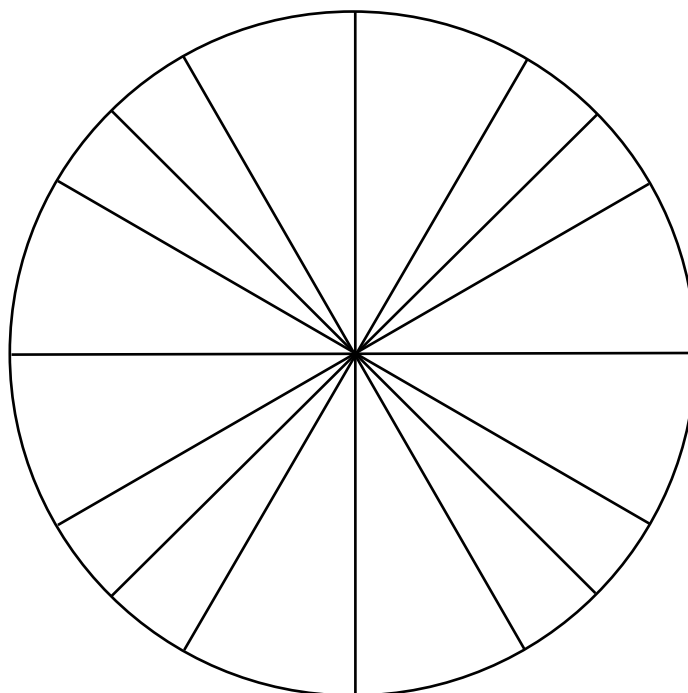
Solve: Give a solution for a problem or determine the value(s) of a variable.


Verify: Establish the truth of a statement by substitution or comparison.

Determine: Use a mathematical formula, an algebraic equation, or a numerical calculation to solve a problem.

State: Give an answer without an explanation or justification.

Unit Circle (can be used if needed)

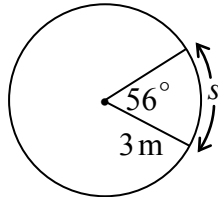



Question 1 

2 marks

101

Use the information in the diagram to determine the value of the arc length “ s ”, given the central angle of 56° .




Question 2 

4 marks

102

Solve $\tan^2 \theta - 5 \tan \theta + 4 = 0$ where $\theta \in \mathbb{R}$.


Question 3 

4 marks

103

Solve:

$$2^{5x} = 3(5)^{x-3}$$

Question 4 


3 marks

104

David and Sarah are in a class of 10 boys and 8 girls.

A committee of 3 boys and 2 girls is to be selected from the students in this class.


Determine the number of possible committees if David and Sarah cannot be on the same committee.

Question 5 

3 marks

105

In the binomial expansion of $\left(\frac{3}{x^2} - x^5\right)^{10}$, simplify the 7th term.

Question 6 

2 marks

106

A lake affected by acid rain has a pH of 4.4.

A person suffering from heartburn has a stomach acid pH of 1.2.

The pH of a solution is defined as $\text{pH} = -\log\left[\text{H}^+\right]$ where $\left[\text{H}^+\right]$ is the hydrogen ion concentration.

How many times greater is the hydrogen ion concentration of the stomach than that of the lake?

Express your answer as a whole number.

Note: A calculator is not required for the remaining test questions.

Question 7

4 marks

107

Solve the following equation algebraically over the interval $[0, 2\pi]$.

$$\cos 2\theta - 3 \sin \theta - 2 = 0$$

Question 8

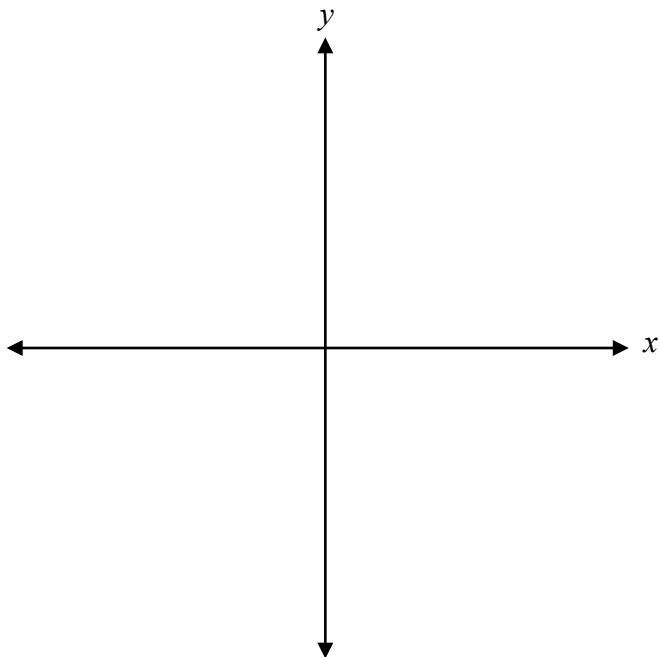
1 mark

108

Explain how the value of n affects the behaviour of the graph of the polynomial function

$p(x) = (x + 3)(x - 1)^n$, as $p(x)$ approaches the x -intercept at $x = 1$.

Sketch the angle -320° in standard position.

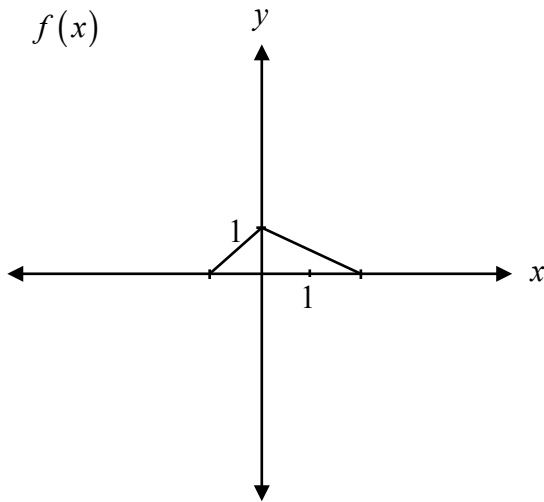


Question 10

1 mark

110

Given the graph of $y = f(x)$, explain how to graph $y = f(-x)$.



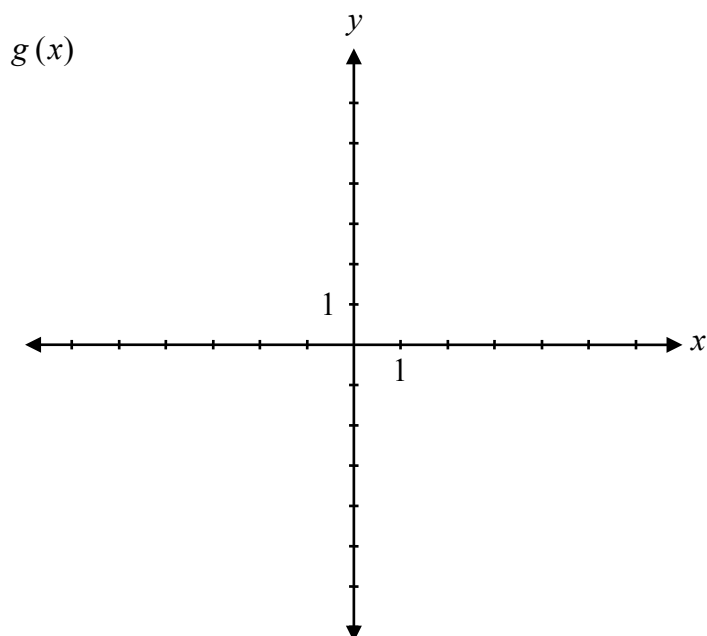
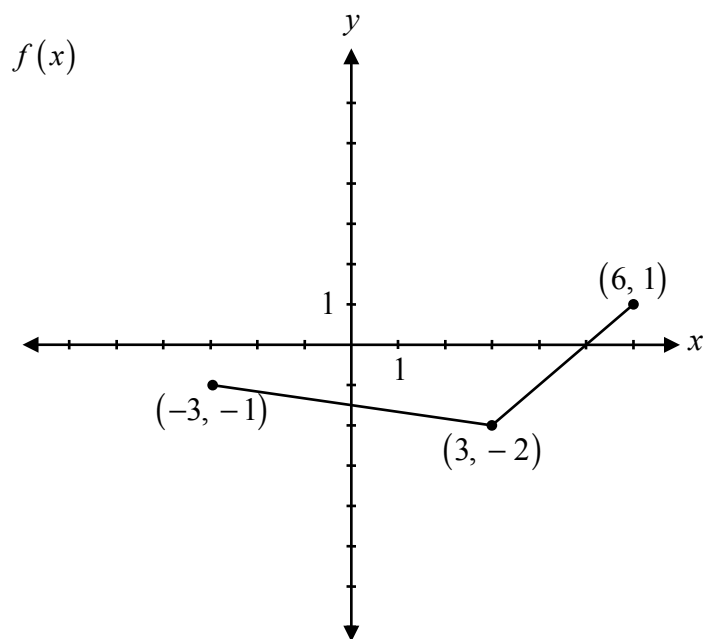
Explain how the graph of $y = \frac{3(x-1)}{(x-1)}$ is different than the graph of $y = 3$.

Question 12

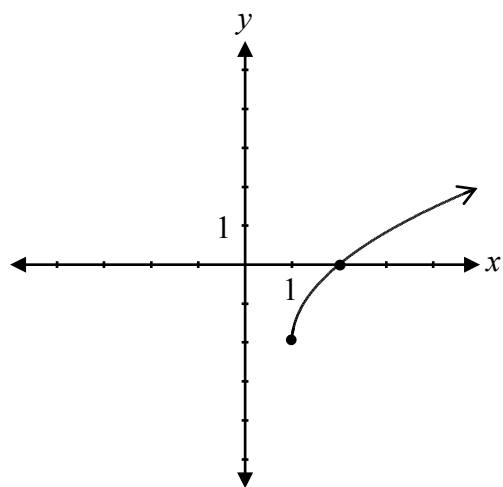
2 marks

112


Given the graph of $f(x)$, sketch the graph of $g(x) = 2f(3x)$.



Determine the equation of the radical function represented by the graph.



No marks will be awarded for work done on this page.



No marks will be awarded for work done on this page.

No marks will be awarded for work done on this page.